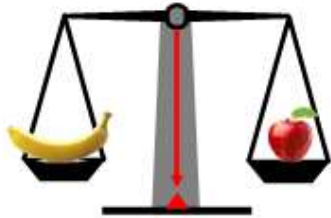


Y2 – Monday – Mass - ANSWERS

LO: I can compare mass



The banana weighs the same as the tomato.

banana



apple

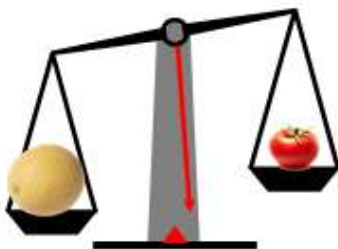


The grapes weigh less than the broccoli.

grapes



broccoli

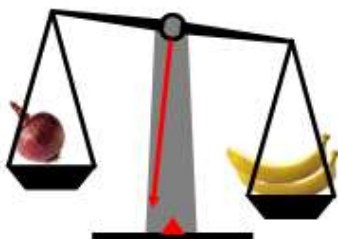


The melon weighs more than the tomato.

melon



tomato




The onion weighs less than the bananas.

onion



bananas

1.



more


less

The book weighs more than the cup and less than the milk.

The cup weighs less than the book and less than the milk.

The milk weighs more than the cup and more than the book.

2.



cake

sandwich

milkshake

The sandwich weighs more than the cake but less than the milkshake.



One pear weighs 10 cubes.
How many cubes will balance one
pineapple?
Explain how you know.

1 pineapple weighs
20 cubes.