


Y2 – Monday – Mass

LO: I can compare mass



The banana weighs _____ the tomato.

banana



apple

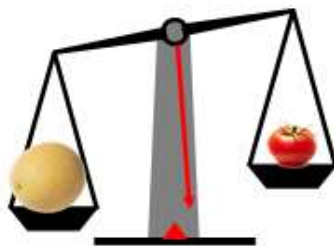


The grapes weigh _____ the broccoli.

grapes



broccoli



The melon weighs _____ the tomato.

melon



tomato



The onion weighs _____ the bananas.

onion



bananas

1.




more
less

The book weighs _____ than the cup and _____ than the milk.

The cup weighs _____ than the book and _____ than the milk.

The milk weighs _____ than the cup and _____ than the book.

2.



cake
sandwich
milkshake

The _____ weighs more than the _____ but less than the _____.



One pear weighs 10 cubes.
How many cubes will balance one
pineapple?
Explain how you know.