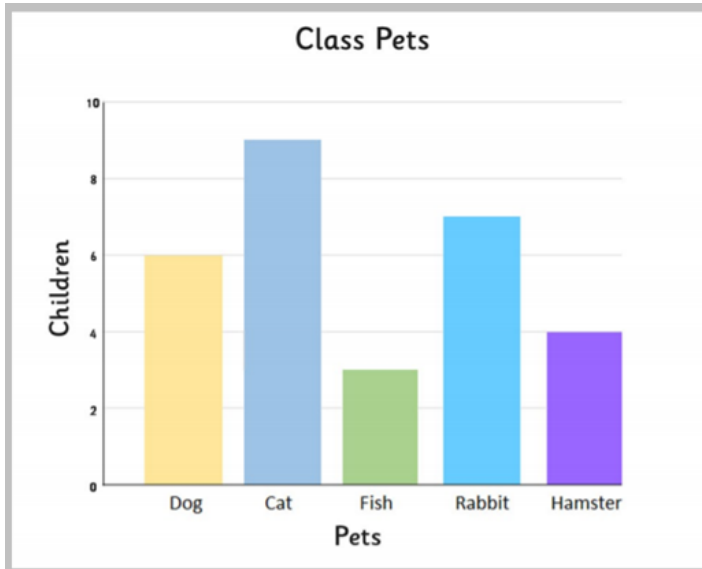


## Y4 – Statistics – Lesson 1 - ANSWERS

### LO: I can interpret bar charts



Answer the following questions.

1. Which is the most common pet?

cat

2. How many pets are there in the class?

29

3. How many more rabbits than hamsters are there?

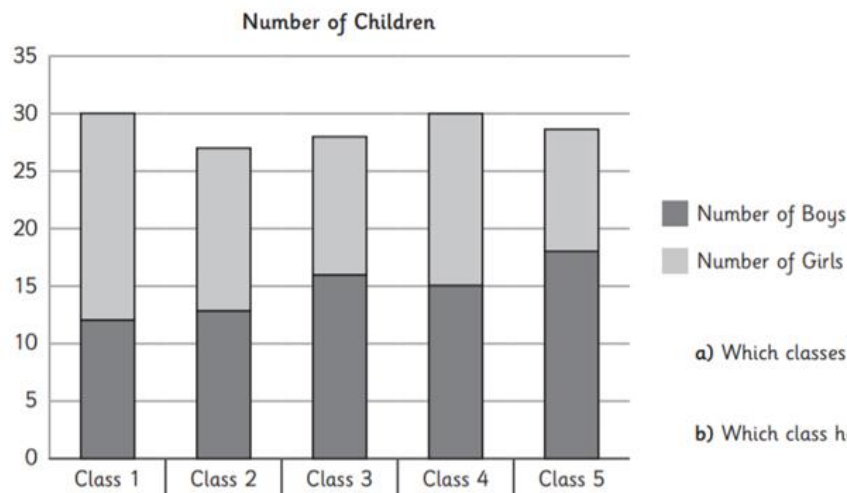
3

4. How many fewer dogs than cats are there?

3

Write your own questions for a friend.

1. Here is a bar chart showing the numbers of boys and girls in classes in a school:



a) Which classes have the most children?

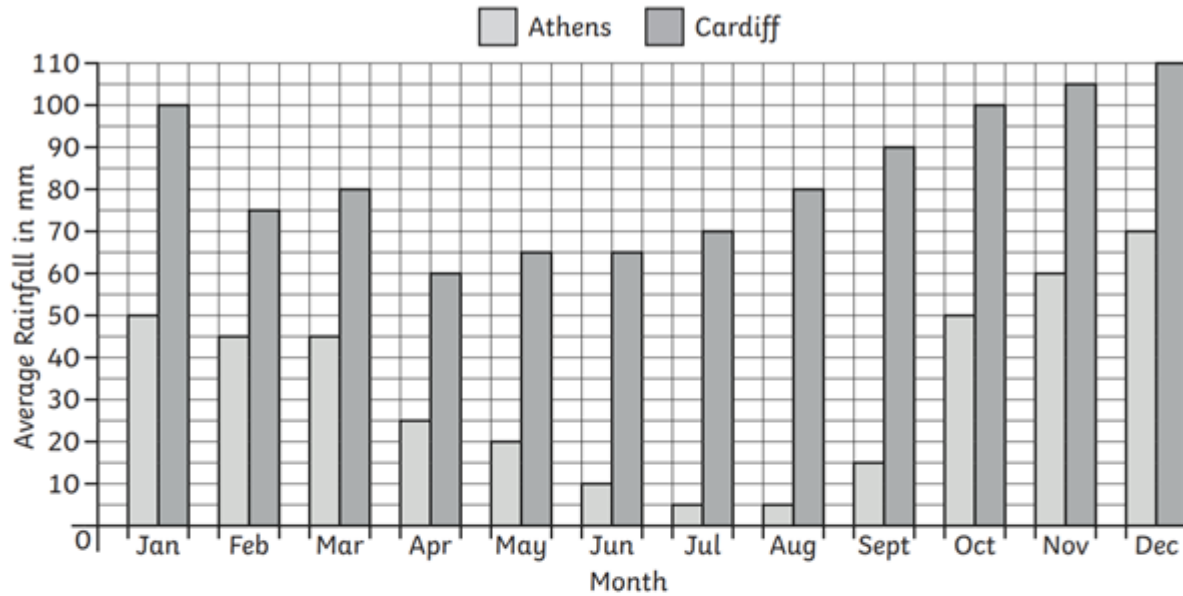
Class 1 and Class 4

b) Which class has the least number of girls?

Class 5

c) Complete this sentence: In class 3 there are  boys and  girls.

A Graph to Show the Average Rainfall in Two Capital Cities



1) Which months in Athens have the lowest average rainfall?

July and August

2) Which month in Cardiff has the lowest average rainfall?

April

3) Which month in Athens has the highest average rainfall?

December

4) Which month in Cardiff has the highest average rainfall?

December

5) Which month in Athens has an average rainfall of 20mm?

May

6) Which months in Cardiff have an average rainfall of 100mm?

Jan and Oct

7) How many mm of rain does Athens get in August?

5mm

8) How many mm of rain does Cardiff get in November?

105mm

9) How many mm of rain does Athens get from June to August?

20mm

10) How many mm of rain does Cardiff get from June to August?

215mm

11) What is the difference in rainfall between the two cities in February?

30mm

12) What is the difference in rainfall between the two cities in December?

40mm

