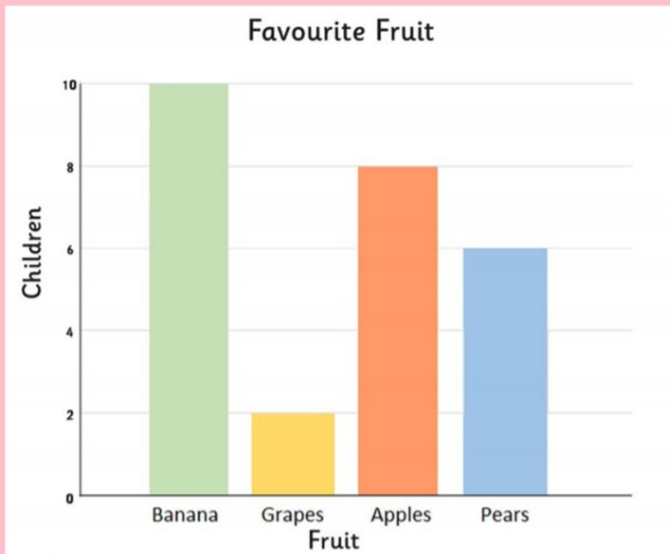


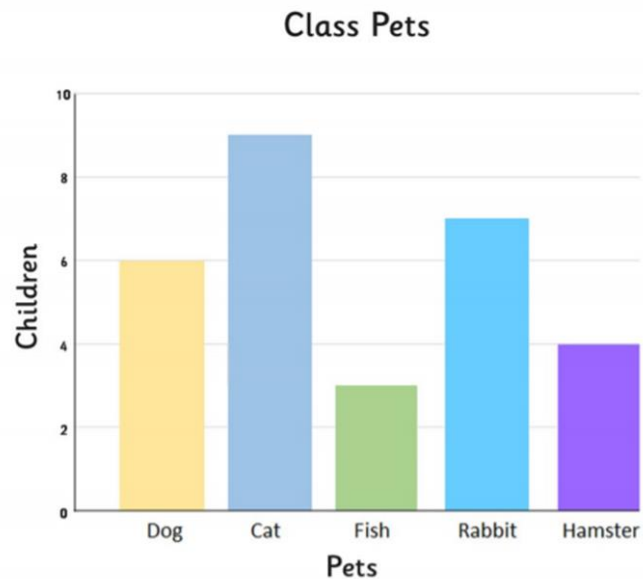
Y4 – Statistics – Lesson 1

LO: I can interpret bar charts



Answer the following questions.

1. What is the favourite fruit?
2. How many children chose apples as their favourite fruit?
3. How many more children chose bananas than grapes, as their favourite fruit?
4. How many children chose apples or pears as their favourite fruit?

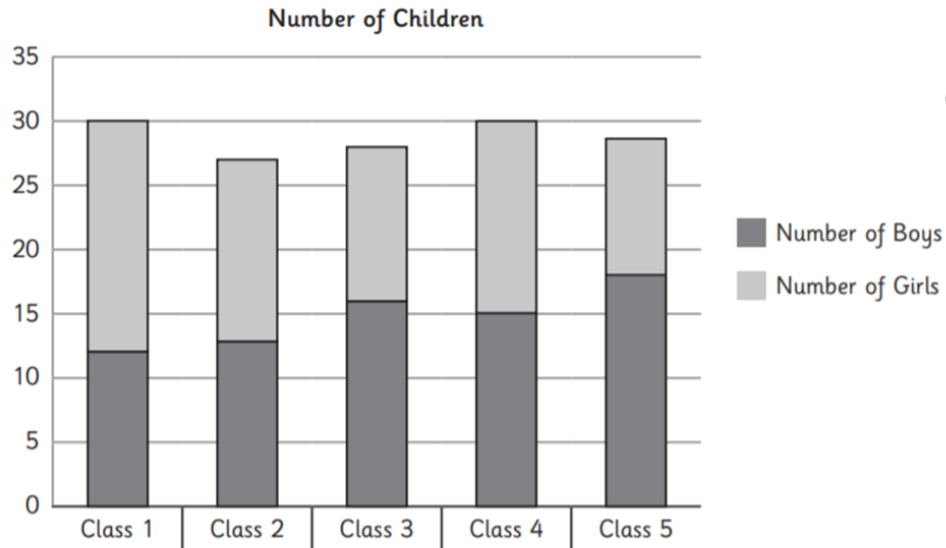


Answer the following questions.

1. Which is the most common pet?
2. How many pets are there in the class?
3. How many more rabbits than hamsters are there?
4. How many fewer dogs than cats are there?

Write your own questions for a friend.

1. Here is a bar chart showing the numbers of boys and girls in classes in a school:



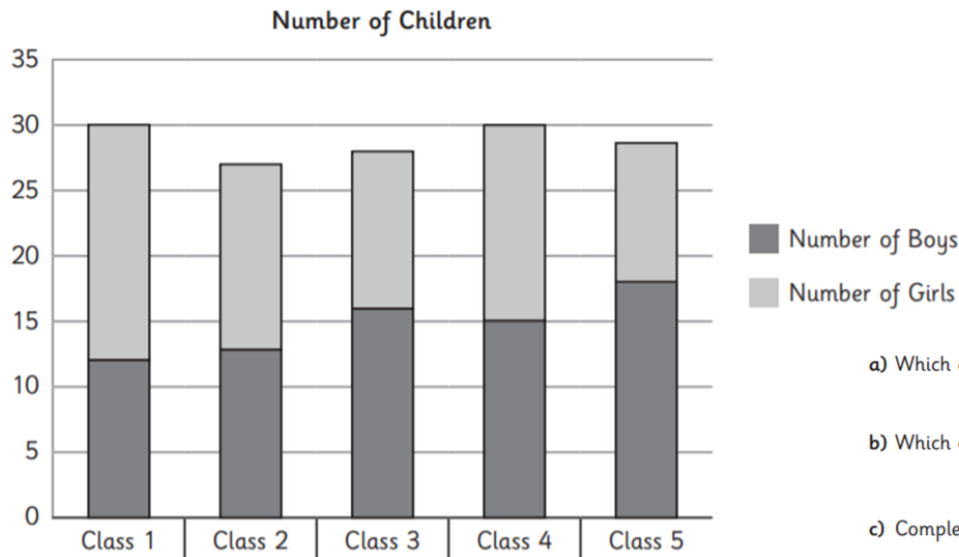
a. Which class has the fewest children in it? **Class 2**

b. Which class has the most number of girls? **Class 1**

c. Complete the sentence:

In class 1 there are 12 boys and 18 girls.

1. Here is a bar chart showing the numbers of boys and girls in classes in a school:

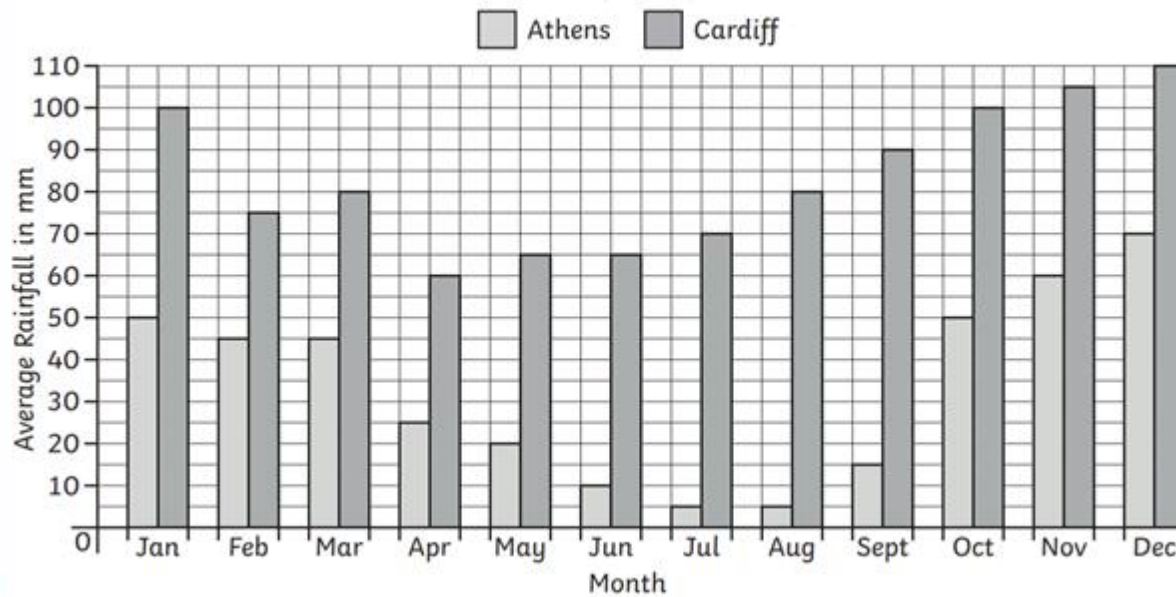


a) Which classes have the most children?

b) Which class has the least number of girls?

c) Complete this sentence: In class 3 there are boys and girls.

A Graph to Show the Average Rainfall in Two Capital Cities



1) Which months in Athens have the lowest average rainfall?

2) Which month in Cardiff has the lowest average rainfall?

3) Which month in Athens has the highest average rainfall?

4) Which month in Cardiff has the highest average rainfall?

5) Which month in Athens has an average rainfall of 20mm?

6) Which months in Cardiff have an average rainfall of 100mm?

7) How many mm of rain does Athens get in August?

8) How many mm of rain does Cardiff get in November?

9) How many mm of rain does Athens get from June to August?

10) How many mm of rain does Cardiff get from June to August?

11) What is the difference in rainfall between the two cities in February?

12) What is the difference in rainfall between the two cities in December?
